

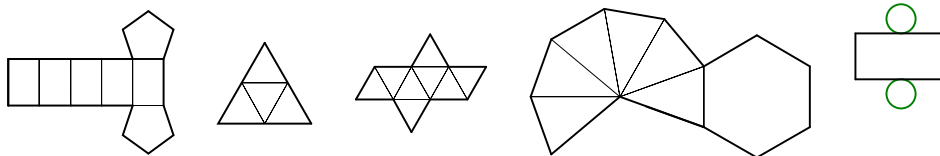
**MATH 213 / Final Review Questions, F2015**

*Don't forget to do the practice chapter test questions in your textbook too!*

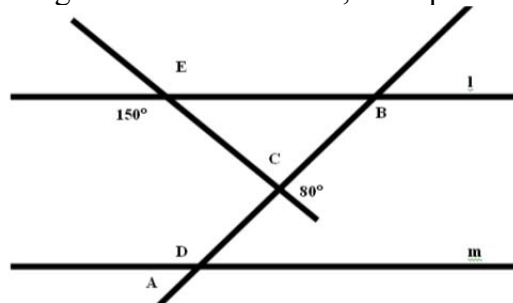
1. Sketch a **concave polygon** and explain why it is both **concave and a polygon**.
2. Sketch a **simple closed curve** and explain why it is both **simple and closed**.
3. Determine the measure of the **vertex, central and exterior angles** of a **regular heptagon, octagon and nonagon**.
4. Determine whether each figure is a regular polygon. If it is, explain why. If it is not, state which condition it does not satisfy.



5. A prism has 69 edges. How many vertices and faces does it have?
6. A pyramid has 69 edges. How many vertices and faces does it have?
7. A prism has 24 faces. How many edges and vertices does it have?
8. A pyramid has 24 faces. How many edges and vertices does it have?
9. Which regular polygons tessellate? Explain and illustrate your answer with a sketch.
10. Sketch a pattern block figure with exactly four rotational symmetries and no lines of symmetry. List the angles of rotation.
11. Sketch a pattern block figure that is not a regular polygon, with exactly three lines of symmetry. Mark the lines and label them L1, L2 and L3
12. What are these nets for? Be exact:

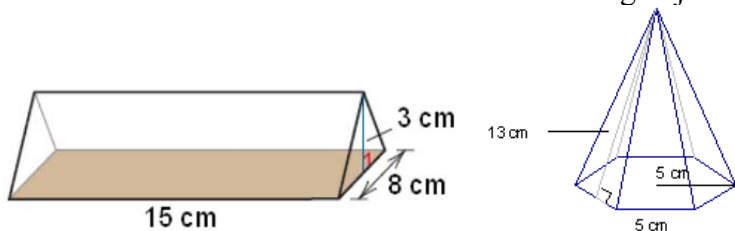


13. In the following figure, line  $l$  is parallel to line  $m$ . Given the angle measures indicated on the figure, find the measures of all of the angles. Use mathematics, not a protractor.

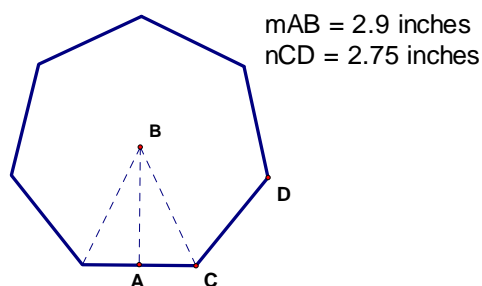
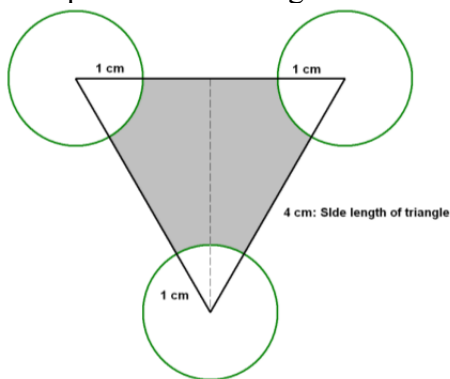


14. If you halve the length of each side of a rectangle, by what factor does the PERIMETER of the rectangle expand or contract? What if you alter the length by a factor of A?
15. If you double the length of each side of a rectangular prism, by what factor does the SURFACE AREA of the prism expand or contract? What if you alter the length by a factor of A?
16. If you double the radius of a sphere, by what factor does the VOLUME of the sphere expand or contract? What if you alter the length by a factor of A?
17. How many CUBIC FEET of gravel are needed to cover a 2 yard x 3 yard area filled to 0.9 yard high?
18. If five tennis balls of diameter 6.5 cm. are packed into a cylindrical can that exactly holds the five balls (the can also has diameter 6.5 cm.); what is the volume of the UNUSED SPACE in the can?

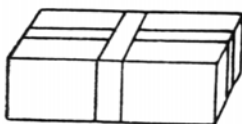
19. Modify all three sides of an equilateral triangle to create a shape that tessellates. Briefly explain your work and use tracing paper to aid you as you sketch the beginning of a tessellation using this template. What type of tessellation is it?
20. Find the surface area and volume of the following objects.



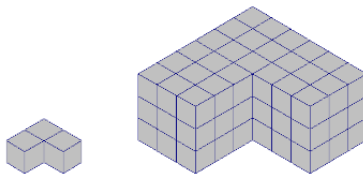
21. The following equilateral triangle has three circular regions surrounding it. What is the area of the shaded portion of the diagram?



22. What is the area of the regular heptagon pictured above? Show your work. Include units.
23. Lisa is buying special hardwood flooring from Germany and the cost (in US dollars) is \$1500 per bundle. Each bundle will cover 12 square meters. If Lisa wants to put the flooring in a room that is 18 feet by 20 feet, how much will the flooring cost? Note: Lisa can only buy whole bundles (e.g. she can't buy 1/2 of a bundle, etc). Show all work and conversions. Note 1 yard  $\approx$  .915 meters.
24. This package is 12 inches longer than it is wide. It is also 6 inches wider than it is high. If the total length of the ribbon needed to go around both ways is 96 inches long, what is the length of the package?

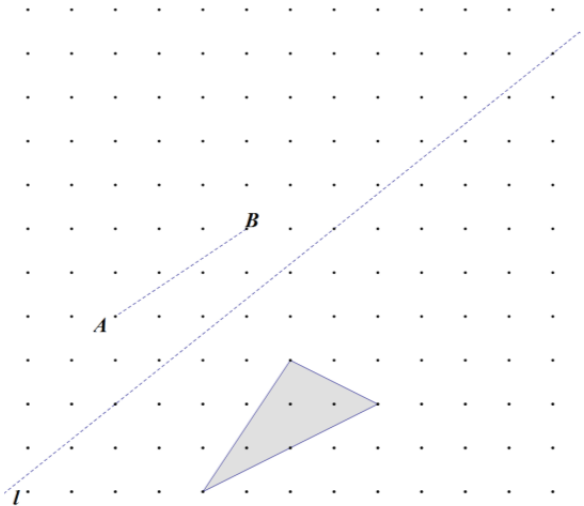
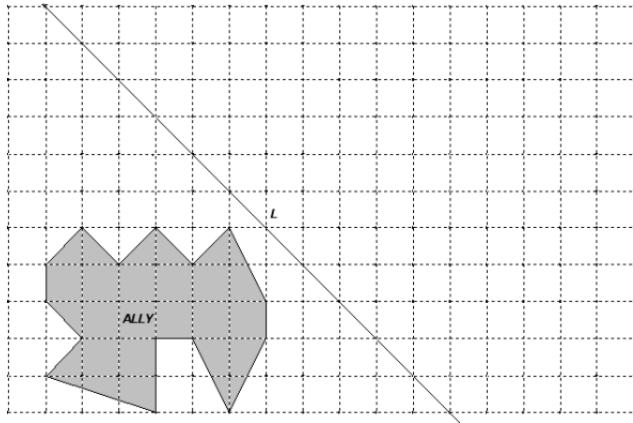
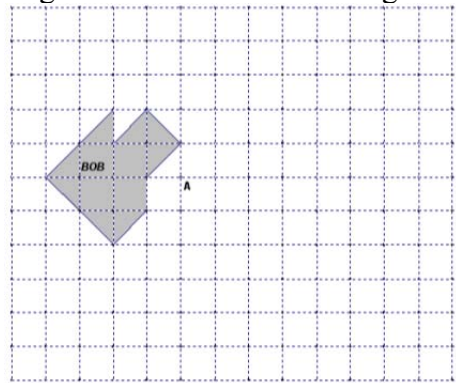
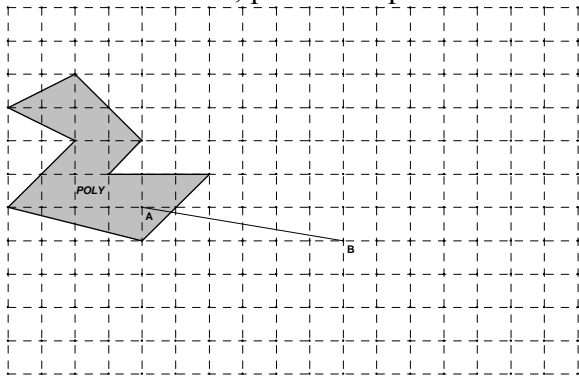


25. The following two figures are similar. Each dimension of the larger figure is TRIPLE the corresponding dimension of the smaller figure. If this tripling of dimensions is continued, how many cubes will there be in the **FOURTH (nth)** figure? If the dimensions of the first figure are doubled rather than tripled, how many cubes would there be in the **SECOND (nth)** figure?

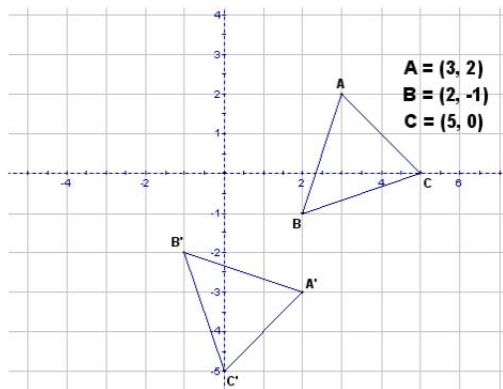


26. Julia and James just bought their first house. They are so excited they had a scale model of their new house made. The scale factor relating their model to the actual house is 75. If the length of one side of the actual house is 50 feet, how many **inches** long is the corresponding side of the model house? If the volume of the model of the house is  $0.10 \text{ feet}^3$ , what is the volume of the actual house?

27. Sketch the translated image of POLY for the mapping that maps A to B.
28. Sketch the rotated image of BOB for a  $90^\circ$  counterclockwise rotation about point A:
29. Sketch the reflected image of ALLY over the line L
30. Use the motion; point A to point B and line L to sketch a glide reflection of the triangle/



31. In the diagram below triangle  $A'B'C'$  is the image of triangle  $ABC$  under a rotation through  $90^\circ$  clockwise centered at the origin.

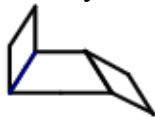


What are the coordinates of  $A'$ ,  $B'$  and  $C'$ ?

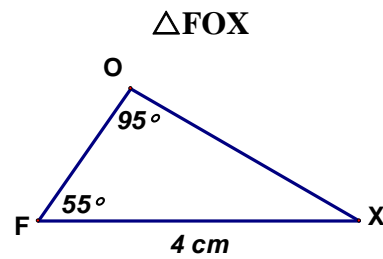
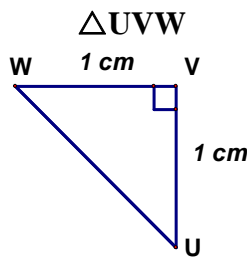
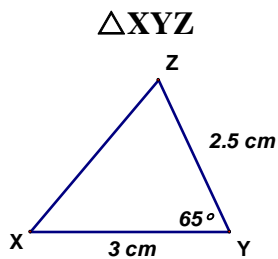
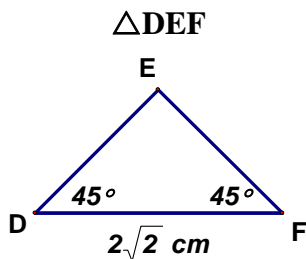
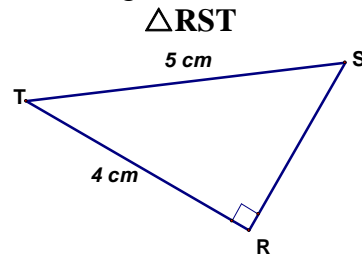
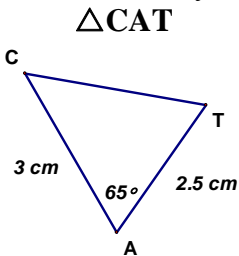
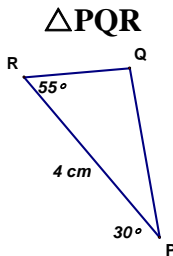
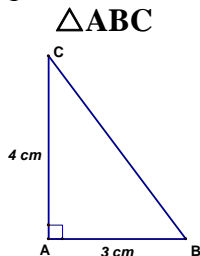
Generalize the rule for this rotation, i.e., create a rule that would move any point the same way.

$(x, y)$  is moved to the point ( \_\_\_\_\_, \_\_\_\_\_ )


32. The following figure is made using two tan parallelograms and one red trapezoid from the pattern blocks. Sketch an enlargement of the figure by a scale factor of 2. Use as many tan parallelograms and red trapezoids in your enlargement as possible. If instead you were to sketch an enlargement by a scale factor of 3 (or 4 or 5), how many tan parallelograms and how many red trapezoids (or combined blocks of the same area) would be in your figure?



33. Match the triangles into CONGRUENT or (only) SIMILAR pairs. In each case, solve for unknown values in the triangles (only as needed) and use triangle properties to show why the matched triangle pair is CONGRUENT or SIMILAR. Explain as needed. Show your work. Triangles are not to scale.



34. In the following diagram a clinometer was used to determine that the angle of elevation, angle PEF, from the observer's eye to the top of the statue is  $23^\circ$ . This knowledge enables us to correctly draw the scale model of triangle PEF which is similar to the actual triangle formed by the observer's eye and the two parts of the statue as shown in the picture. In our scale triangle, the length of side EP is 9 inches and the length of side EF is 10.82 inches. Suppose both the observer and the statue are at ground level, the observer is 40 feet from the statue and the observer's eye is 5 feet above ground. What is the height of the statue?



## TRUE OR FALSE QUESTIONS

35. Every equilateral triangle is isosceles.
36. A rhombus is a regular polygon.
37. Every hexagon is a regular polygon.
38. The acute angles of a right triangle are complementary.
39. The acute angles of a right triangle are supplementary.
40. If two angles are supplementary, one must be either right or obtuse.
41. Every prism has a square base.
42. A quadrilateral may have all acute angles.
43. A quadrilateral may have both a right angle and an obtuse angle.
44. A semi-regular tessellation can be made using only regular hexagons and squares.
45. Every prism has rectangular lateral faces.
46. Some scalene triangles are right triangles.
47. Every pyramid has isosceles triangles sides.
48. All quadrilaterals have at least two lines of symmetry.
49. The top of a cone is called a vertex or apex.
50. Any two regular polygons that tessellate by themselves can be used together to create a semi-regular tessellation.
51. If a polygon is concave, then it must have a reflex angle.
52. All regular polygons are convex.
53. 4 quarts = 128 ounces
54. If the area of a circle doubles, so does the radius.
55. If the surface area of two cylinders is the same, then the cylinders have the same volume.
56. A cube of with side length 10cm would fit inside of a circle with diameter 10cm.
57.  $25^{\circ}$  C is warmer than  $50^{\circ}$  F.
58. The volume of a right pyramid is 3 times the volume of a right prism with the same base and height.
59. The diagonals of a kite intersect at right angles.
60. All right triangles are similar.
61. Triangle 1 has side lengths 2 cm, 3 cm and 5 cm. Triangle 2 has side lengths 2 cm, 3 cm and 5 cm. Triangle 1 and Triangle 2 must be similar.
62. If a rectangular prism is scaled by a factor of 3, the surface area increases by a factor of 6.
63. Triangle 1 has angles  $40^{\circ}$ ,  $40^{\circ}$  and  $100^{\circ}$  and Triangle 2 has angles  $40^{\circ}$ ,  $100^{\circ}$  and  $40^{\circ}$ . Triangle 1 and Triangle 2 must be congruent.